



4.10.21

Rounding to the nearest 10



23p



89p



314p



112p



33p



67p



45p



287p

What two items
can you buy for
under £1?

Approximately how
much will your shop cost
if you buy all of the
items?

What two items
can you buy for
under £1?

Approximately how
much will your shop cost
if you buy all of the
items?

What is the most expen-
sive item you can buy
with 70p?

What is the best
lunch you can buy
for £4?


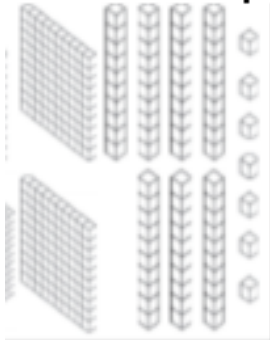
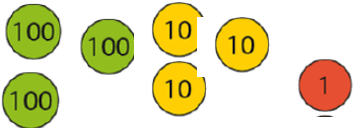
What is the most expen-
sive item you can buy
with 70p?

What is the best
lunch you can buy
for £4?

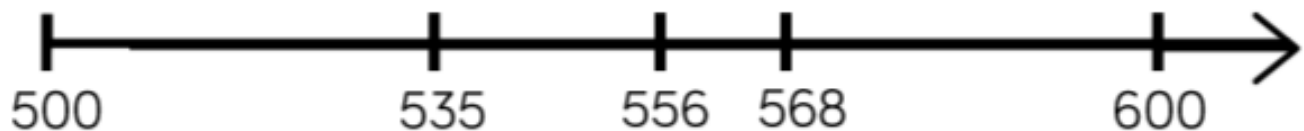


5.10.21

Rounding to the nearest 100

Start number	Rounded to the nearest 100
994	
871	
	
	
	

▶ Say whether each number on the number line is closer to 500 or 600.



Round 535, 556 and 568 to the nearest 100



5.10.21

Challenge

When a whole number is rounded to the nearest 100, the answer is 200

When the same number is rounded to the nearest 10, the answer is 250

What could the number be?

Is there more than one possibility?



5.10.21

Challenge

When a whole number is rounded to the nearest 100, the answer is 200

When the same number is rounded to the nearest 10, the answer is 250

What could the number be?

Is there more than one possibility?

(((What is the same about rounding to the nearest 100, compared to rounding to the nearest 10?

What is different?

(((What is the same about rounding to the nearest 100, compared to rounding to the nearest 10?

What is different?

(((What is the same about rounding to the nearest 100, compared to rounding to the nearest 10?

What is different?

(((What is the same about rounding to the nearest 100, compared to rounding to the nearest 10?

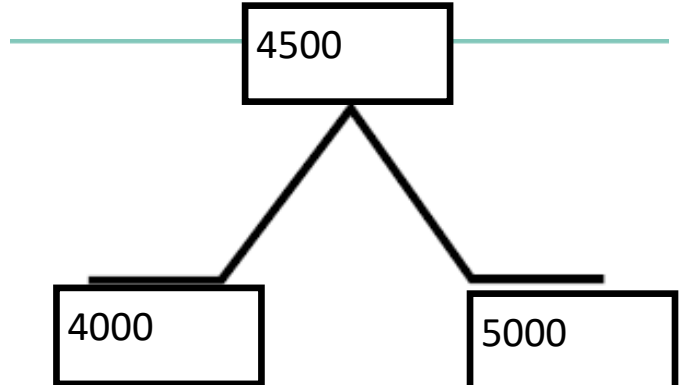
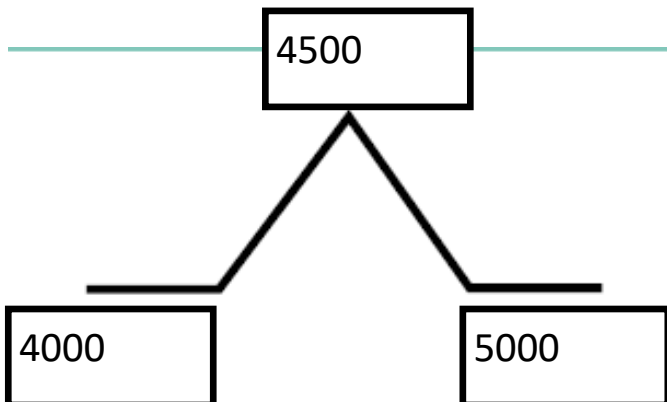
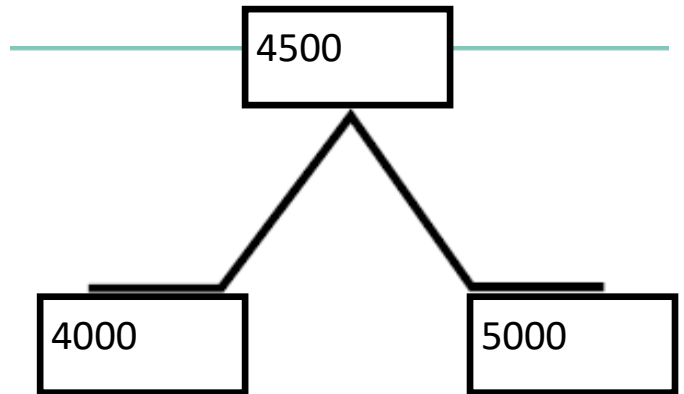
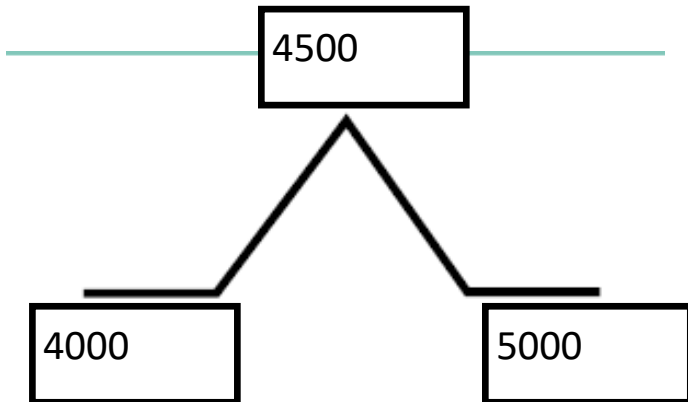
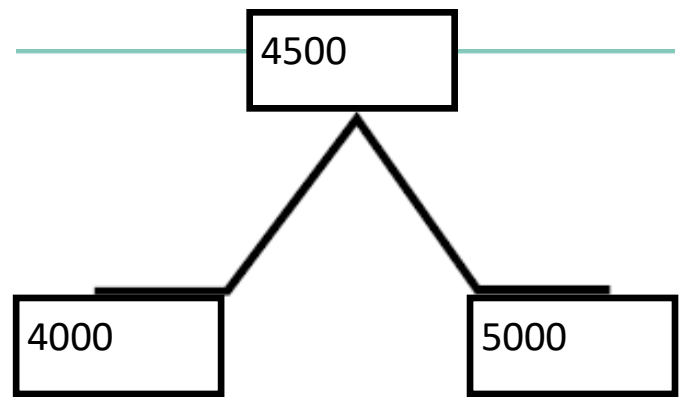
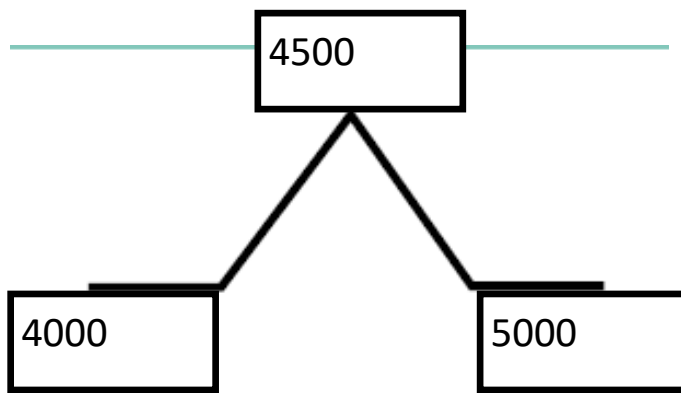
What is different?



8.10.21

Rounding to the nearest 1000

Roll the dice to create 4 digit numbers. Work out if you would round up or down with this number. If there is space on the board write it in. Your aim is to have the most numbers on the board.



Rounding to the nearest 1000

Round the following numbers to the nearest 1000.

2318 2600 4150 1900 3875 1250

Rounding to the nearest 1000

Round the following numbers to the nearest 1000.

2318 2600 4150 1900 3875 1250



Challenge

A number is rounded to the nearest thousand.

The answer is 7,000

What could the original number have been?

Give five possibilities.

What is the greatest number possible?

What is the smallest number possible?



Challenge

A number is rounded to the nearest thousand.

The answer is 7,000

What could the original number have been?

Give five possibilities.

What is the greatest number possible?

What is the smallest number possible?