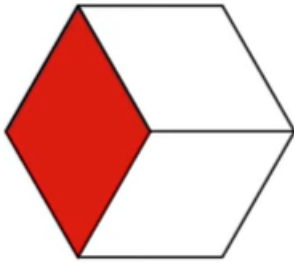


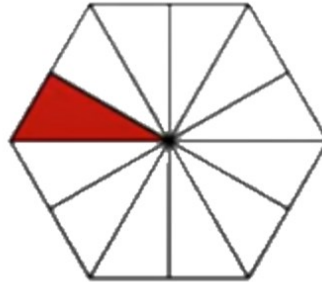


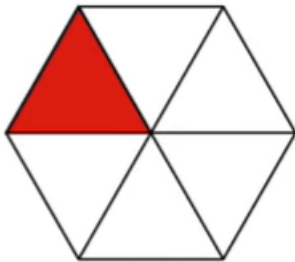
w/c 15.06.20


Understand fraction notation to represent a part of a whole

Write the fraction for each shaded part









Whats the same? Whats different?

Divide this shape into 2, 4, 5 and 8 equal parts. You can use templates on next page...

