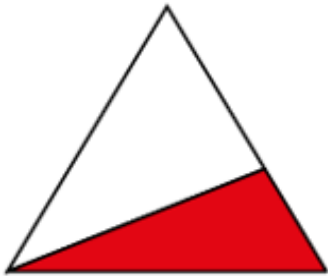


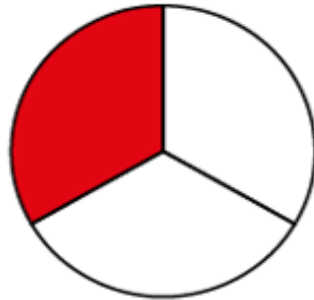


w/c 22.06.20

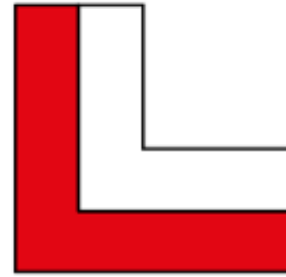
Reason about fractions of shapes



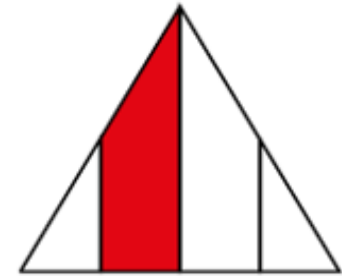
Is $\frac{1}{2}$ shaded?



Is $\frac{1}{3}$ shaded?



Is $\frac{1}{2}$ shaded?



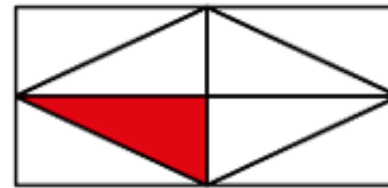
Is $\frac{1}{4}$ shaded?



Is $\frac{1}{3}$ shaded?



Is $\frac{1}{5}$ shaded?



Is $\frac{1}{8}$ shaded?



Is $\frac{1}{6}$ shaded?



w/c 22.06.20

Reason about fractions of shapes

How many different ways can you split these rectangles into quarters?

