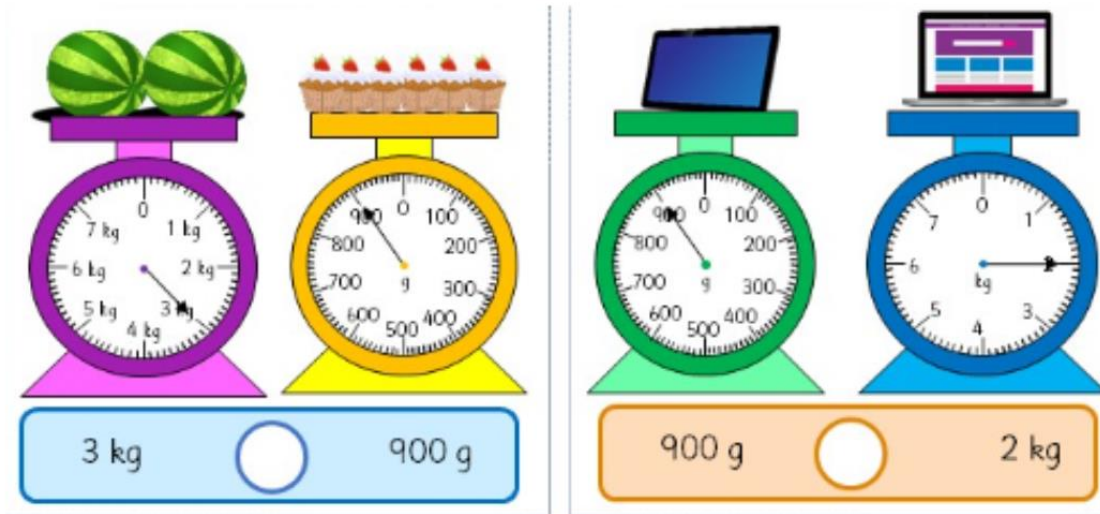




Friday 03.07.20

Comparing Mass

Part A



True or false?

² The blue scale shows the greatest mass on this page?




Part B

Complete these

1. 500g <
2. 3kg >
3. 2kg = g
4. 8500g = kg
5. > 900g

Remember -



Challenge -

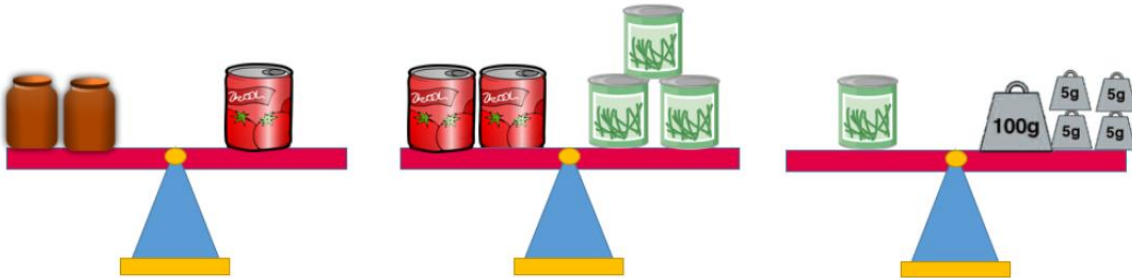
Explain why 5kg is greater than 2500g

³



Part C: challenge

Each of these scales are balanced. What is the mass of each item on the scales?



$$\text{Green Jar} = \text{Red Can} = \text{Brown Jar}$$

4

Hint: you will need to start at the end!

