
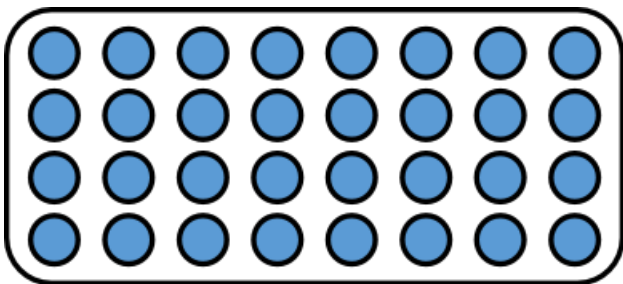






6.01.20


Recognising the inverse operation

Write the fact family for these arrays using your knowledge of 4 times tables.



CHALLENGE 1

What equations can you write for this array? Use your knowledge of times tables.



Can you create your own word problem to go with this array?

CHALLENGE 2

1. Think of a number from 1 to 10. Multiply 4 by the number.
2. Draw an array to show your multiplication.
3. Make a family of multiplication and division equations.