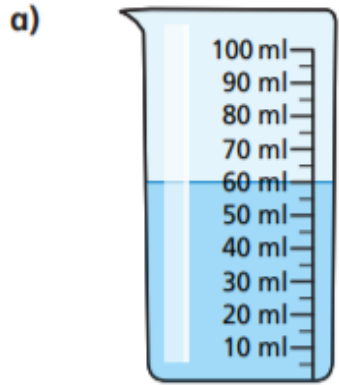
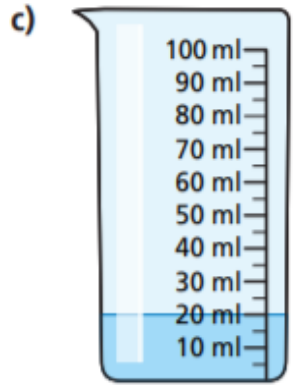


Millilitres

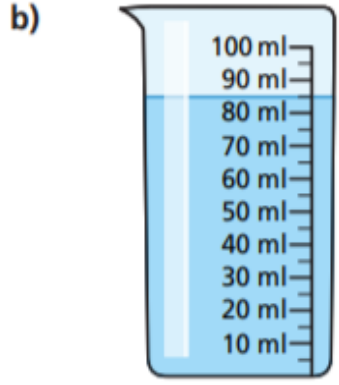
1 How much water is there in each beaker?



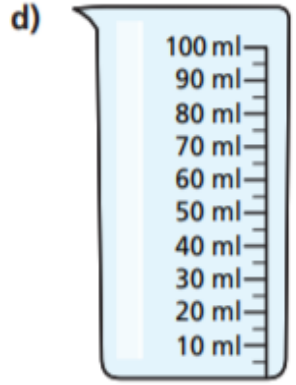
ml



ml



ml



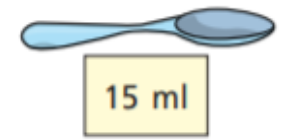
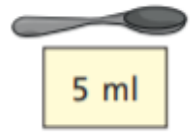
ml

2 Jack pours 12 ml of water into a measuring container.



Draw a line to show where the water reaches.

3 A teaspoon holds 5 ml.
A tablespoon holds 15 ml.




Work out the total capacity of the spoons.



ml



ml



ml

- 4 A recipe includes 45 ml of lemon juice.



Dora

I can measure this using a teaspoon.



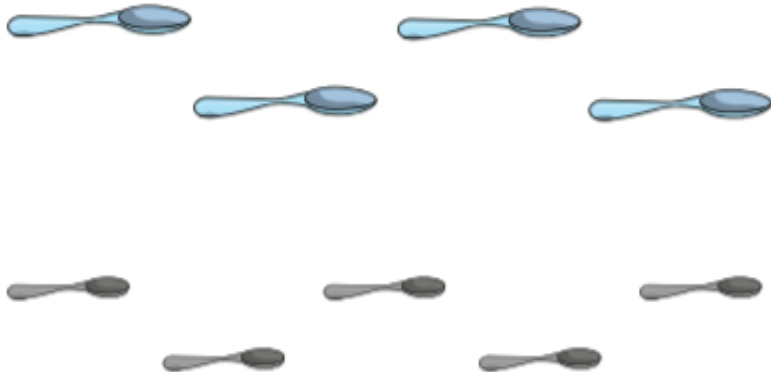
teaspoon 5 ml



tablespoon 15 ml

- a) How many teaspoons is 45 ml?

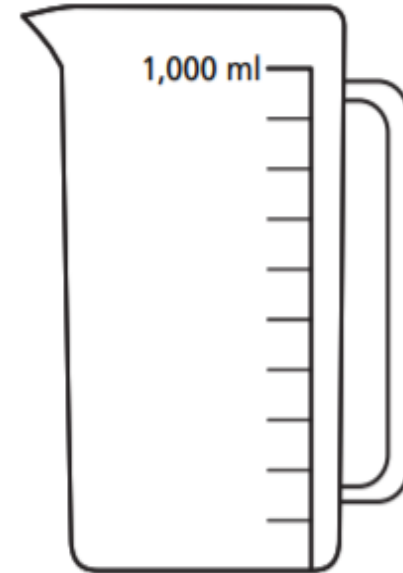
- b) Find another way of measuring 45 ml.
Circle your answer.



- 5 How can you work out the capacity of an egg cup?
Talk about it with a partner.



- 6 Draw a line on the jug to show where 500 ml of juice would reach.



- 7 Mo opens a can of drink.
He pours it all into a measuring jug.



Draw a line to show where the drink will reach.

