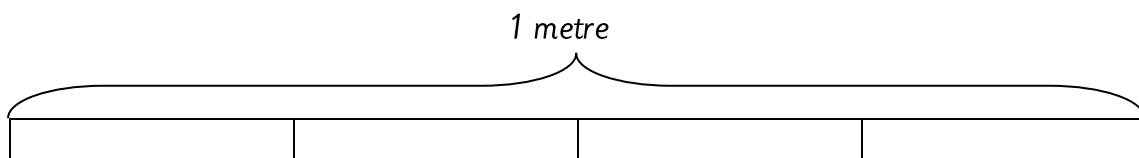





Spicy

1. Colour  $\frac{3}{4}$  metre



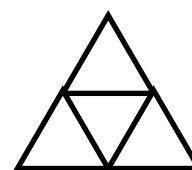
2. Colour the fraction on the picture.



$\frac{5}{8}$

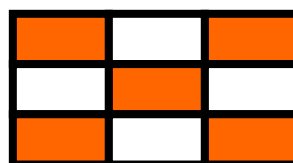


$\frac{4}{7}$



$\frac{3}{4}$

3. Use a non-unit fraction to show the coloured part of the picture?



4. Think hard: Draw it and then write the fraction

Extra Spicy

1. Divide a cake into 3 equal parts, 2 parts of the cake is (            ) .

2. A bar of chocolate is made up of 8 pieces. 5 children each have a piece of chocolate. How many chocolate did they eat?

5. Think hard: What fractions can you see?

