




Monday 3.2.2020

WALT tell the time to the hour.




Work out at what times Jacks adventures occurred.




7 o'clock




11 o'clock



11:05



6:00





Wednesday 5.2.2020

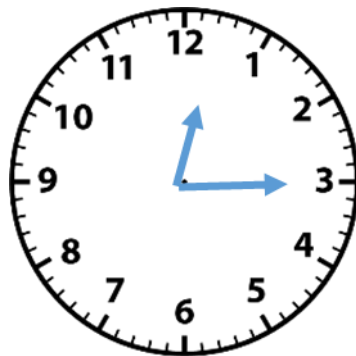
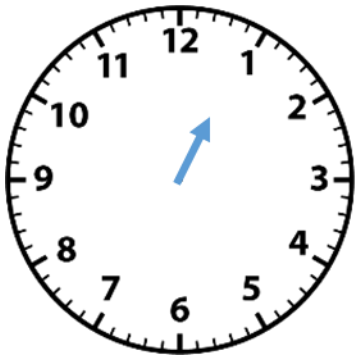
Spicy 

WALT tell the time to the nearest 5 minutes

The hour hand is pointing half way between the 10 and the 11. The minute hand is pointing **at the 5**. Do you see what time it is?

It is
.....
.....
.....

Leo's conjecture



Extra Spicy 

In Australia, the time is 10 hours ahead. Can you convert the times into Sydney Australia time?

A

D

B

E



Friday 7.2.2020

WALT tell the time to the quarter-hour

Spicy 

The hour hand is **almost** pointing to the 11.

The minute hand is pointing **at the 9**.

Do you see what time it is?

It is




.....

.....

.....

Leo's conjecture





Extra Spicy 

In China, the time is 7 hours ahead. Can you convert the times into Beijing China time?

A

D

B

E

C

F