





















Skip Counting in 2s, 5s and 10s

Fill in the missing numbers on these animals as you skip count in 2s, 5s and 10s.

 0	 2			
 56				
 22				
 68				

 0	 5			
 70				
 45				
 80				

 80	 40	 70	
 90	 50	 80	
			
			
			

Counting in 2s Activity

Complete the following sequences:

a) 2 4 6 ----- 10 -----

b) 24 22 ----- 18 ----- 14

c) ----- 26 28 30 ----- 34

d) 46 ----- ----- 40 38 36

e) 28 ----- 32 34 ----- 38

f) ----- 44 42 ----- 38 36

g) 12 14 ----- 18 ----- 22

h) 20 ----- ----- 14 12 10

i) ----- ----- 56 58 60 62

j) 74 72 ----- ----- 66 64

Complete the number square below:

1		3		5		7		9	
11		13		15		17		19	
21		23		25		27		29	
31		33		35		37		39	
41		43		45		47		49	
51		53		55		57		59	

Challenge

How far can you count in 2s?
What happens when you get past 100?

Counting By Fives

Date _____ Name _____

Complete the following sequences:

a) 5 10 15 ___ 25 ___ f) ___ 50 45 ___ 35 30

b) 35 30 ___ 20 ___ 10 g) 35 40 ___ 50 ___ 60

c) ___ 25 30 35 ___ 45 h) 65 ___ ___ 50 45 40

d) 45 ___ ___ 30 25 20 i) ___ ___ 35 40 45 50

e) 15 ___ 25 30 ___ 40 j) 75 70 ___ ___ 55 50

Complete the number square below:

1	2	3	4		6	7	8	9	
11	12	13	14		16	17	18	19	
21	22	23	24		26	27	28	29	
31	32	33	34		36	37	38	39	
41	42	43	44		46	47	48	49	
51	52	53	54		56	57	58	59	
61	62	63	64		66	67	68	69	
71	72	73	74		76	77	78	79	
81	82	83	84		86	87	88	89	
91	92	93	94		96	97	98	99	

Challenge: When you count by 5s, which numbers are odd and which are even? What do you notice?

Counting in 10s

Challenge

When you count in 10s, what do you notice about the numbers?


Complete the following sequences:

a	10	<input type="text"/>	30	<input type="text"/>	50	<input type="text"/>
b	50	<input type="text"/>	70	<input type="text"/>	90	<input type="text"/>
c	40	<input type="text"/>	60	<input type="text"/>	<input type="text"/>	90
d	20	<input type="text"/>	<input type="text"/>	50	<input type="text"/>	<input type="text"/>
e	100	<input type="text"/>	80	<input type="text"/>	60	<input type="text"/>
f	<input type="text"/>	<input type="text"/>	50	60	<input type="text"/>	<input type="text"/>
g	70	<input type="text"/>	<input type="text"/>	40	<input type="text"/>	20
h	<input type="text"/>	<input type="text"/>	30	<input type="text"/>	<input type="text"/>	60
i	90	<input type="text"/>	<input type="text"/>	60	<input type="text"/>	40
j	60	<input type="text"/>	40	<input type="text"/>	<input type="text"/>	<input type="text"/>

Complete the number square below:

1	2	3	4	5	6	7	8	9	
11	12	13	14	15	16	17	18	19	
21	22	23	24	25	26	27	28	29	
31	32	33	34	35	36	37	38	39	
41	42	43	44	45	46	47	48	49	
51	52	53	54	55	56	57	58	59	
61	62	63	64	65	66	67	68	69	
71	72	73	74	75	76	77	78	79	
81	82	83	84	85	86	87	88	89	
91	92	93	94	95	96	97	98	99	

- Multiples Colour by Number ~



Multiples of 2 = green

Multiples of 5 = blue

Multiples of 2, 5 and 10 = red