





Recapped learning from Session 1:

Tens	Ones
	
	

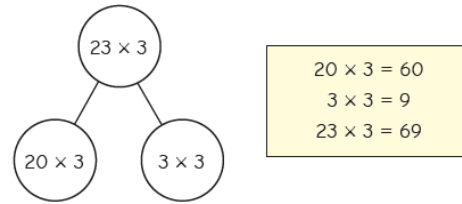
$$2 \times \square = \square$$

$$2 \times \square = \square$$

$$\square + \square = \square$$

$$43 \times 2 = \square$$

Look at this example:



Now try these in your book:

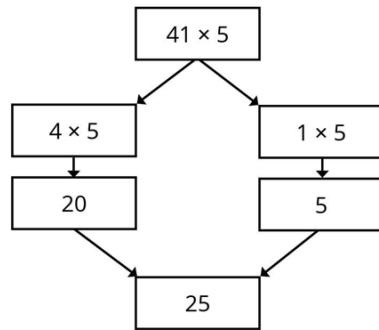

31×2

42×2

22×3

32×3

Tiny is working out 41×5



What has Tiny done wrong?
Work out the correct answer.
