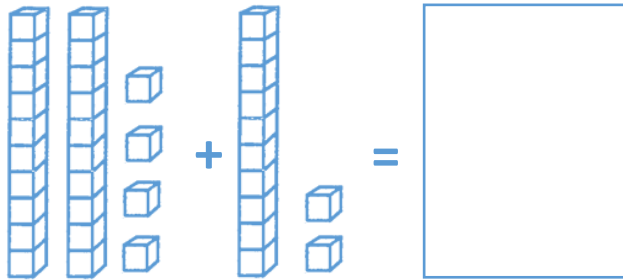




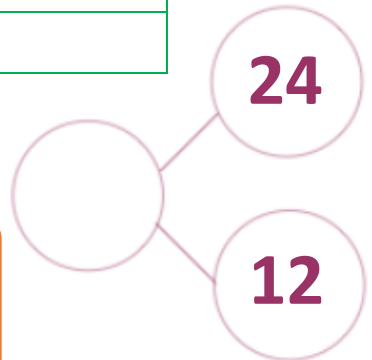
Add 1s within and across 10

$24 + 12 =$

36	
24	




24 + 12 is 3 and 6
because 2 + 1 = 3
and 4 + 2 = 6.



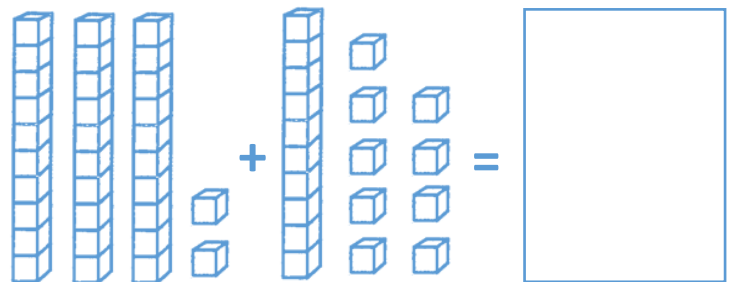
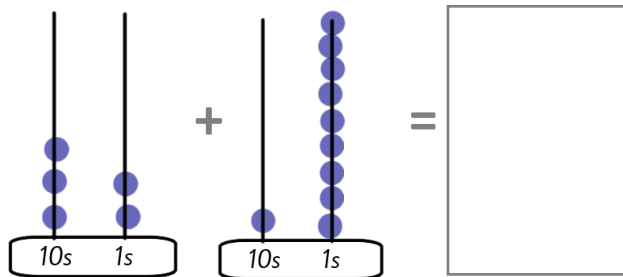
24

36



Is Leo right or wrong? _____
Why? _____

$32 + 19 =$



32	19

32

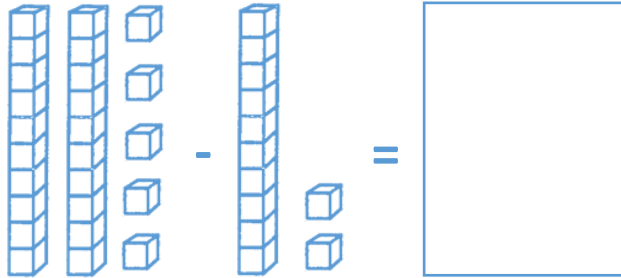




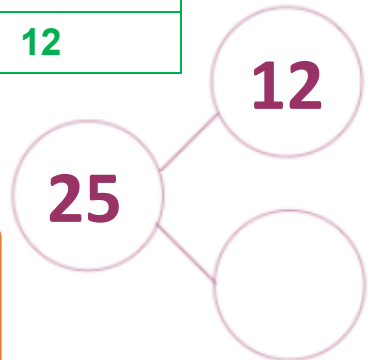
Subtract 1s within and across 10

25 - 12 =

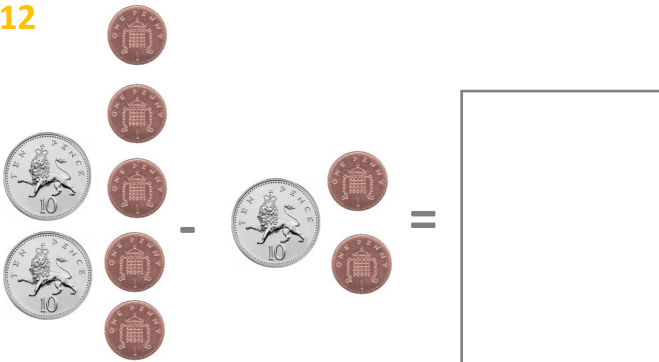
13	12



25 - 12 is 1 and 3
because 2 - 1 = 1 and
5 - 2 = 3.



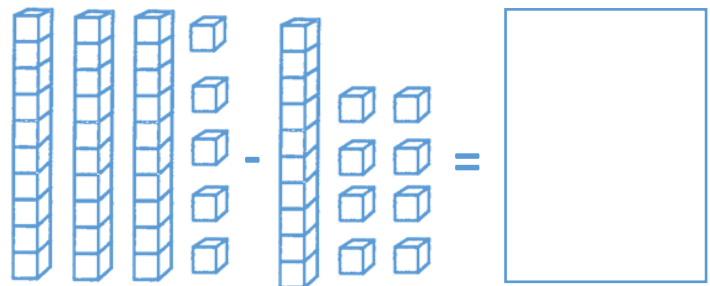
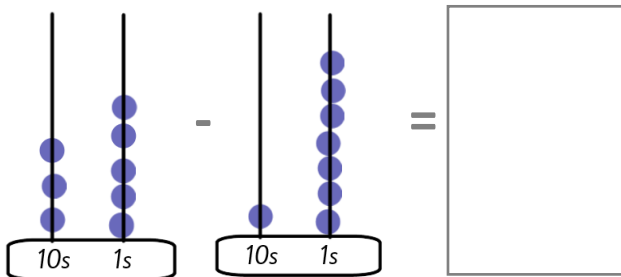
12



25

Is Leo right or wrong? _____
Why? _____

35 - 18 =



35	
	18

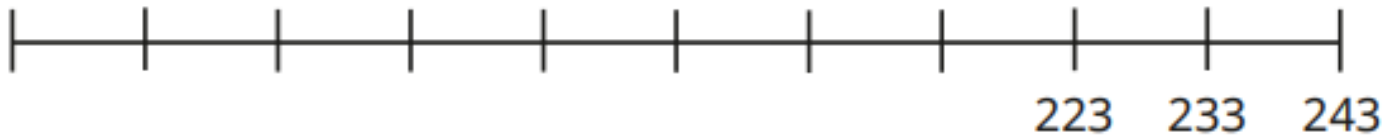
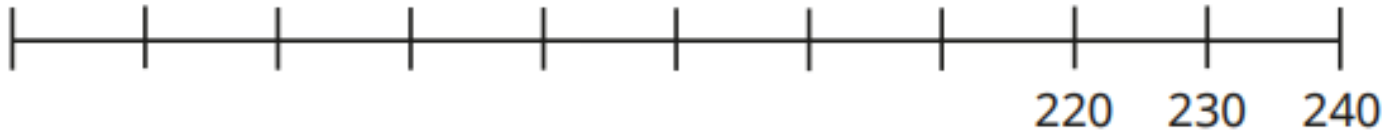
18

35



Subtract 10s within and across 100

Complete the number lines by counting back in 10s.



Use the number lines to work out the subtractions.

$240 - 60$

$240 - 70$

$243 - 70$

$233 - 70$



w/c 20th November 2023

Session 4

Add and subtract 1s and 10s within and across 100

$246 + 90$	$24 + 9$	$324 + 9$	$240 - 90$	$888 - 9$
------------	----------	-----------	------------	-----------

Work out these calculations and record them in your book.

You can use mental strategies or a representation to show your thinking.