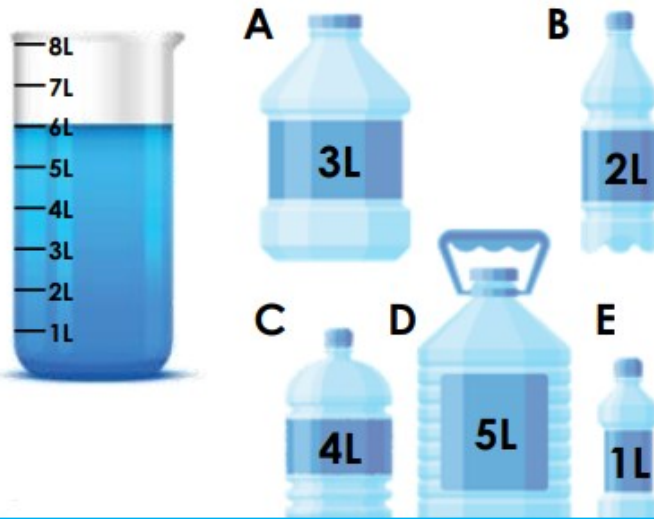





Which combination of bottles could have filled using this volume of water?



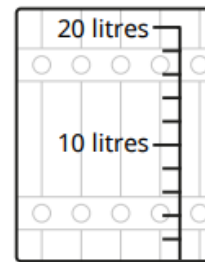
A bottle holds 5 litres of water. How many bottles of water will it take to fill this container?



Dan has some milk. How much does he have altogether



Draw a line to show the volume of milk.

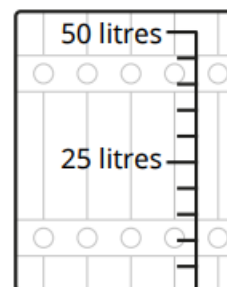
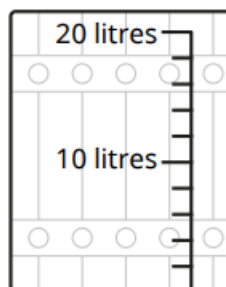
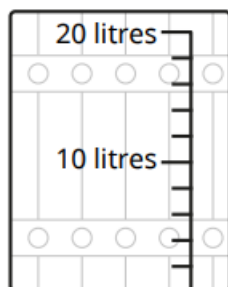


Draw lines on the barrels to match the labels. Make sure you look carefully at the scales!

4 litres

13 litres

35 litres





Tuesday 13th June 2023

MPI: Four operations with capacity

Circle the cartons to make 36l of milk. Show your working out below.




Cola comes in 2l bottles. I buy 7 bottles for my party. How much cola do I have?



Oh no! I noticed that each bottle is only half full. How much cola do I have?

A bucket holds 20l, a bottle holds 2l. How many bottle does it take to fill the bucket?



How many bottles does it take to fill 3 buckets?

Bob has eleven 2l bottles of lemonade. How much he have altogether?

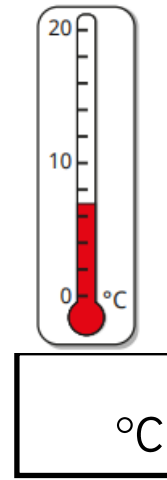
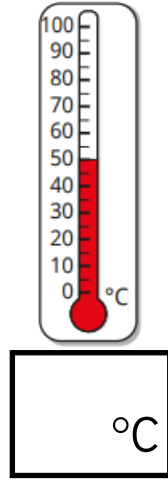
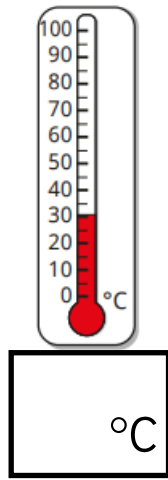
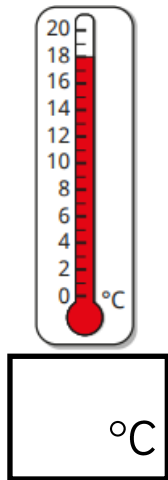


Max has five 5l bottles of water. Who has more altogether? How do you know?

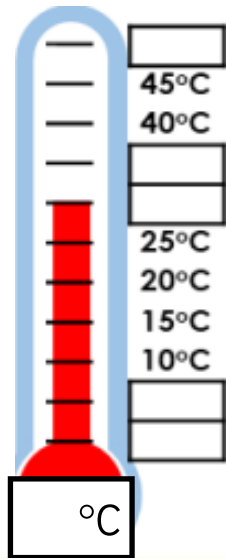
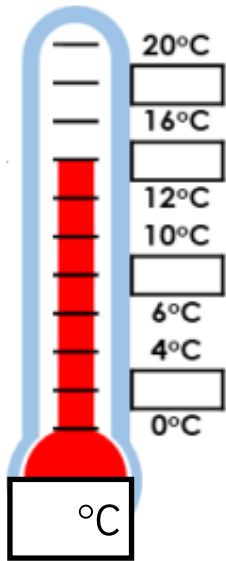




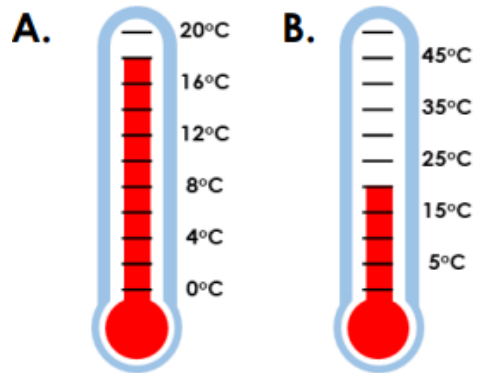
What temperature is each thermometer showing?



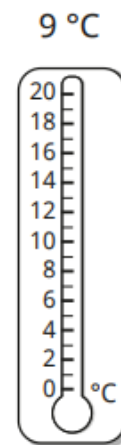
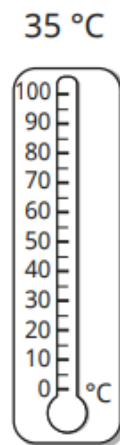

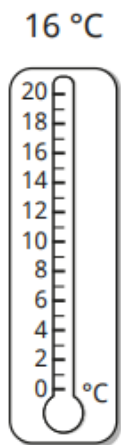
Write the missing numbers on the scales and write what each temperature is.



True or false: A is the warmer temperature because it goes the highest.

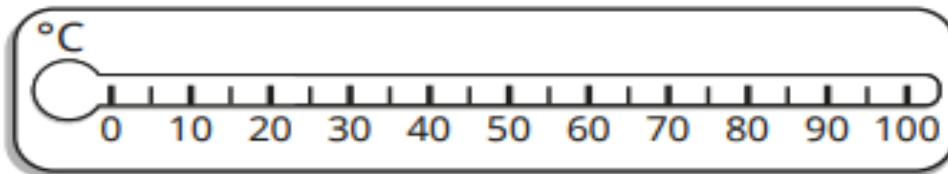
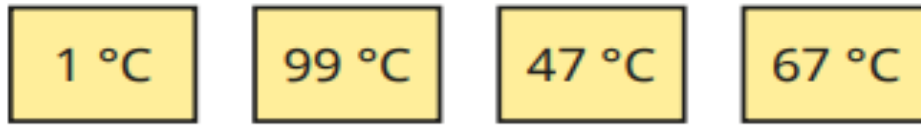


Colour the thermometers to show the temperatures







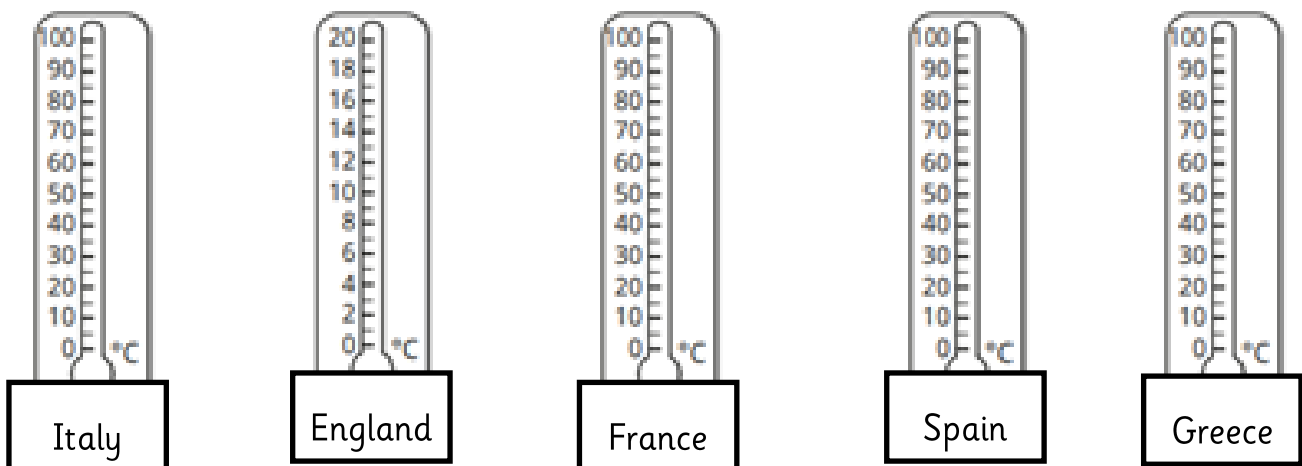
Draw arrows to show where each temperature would go on the scale



This table shows the temperatures in different locations. If Greece is 15°C hotter than Spain, what is the temperature in Greece?

	Italy	England	France	Spain	Greece
	40°C	24°C	25°C	35°C	°C
					

Night time temperatures are 10°C cooler in each country. Complete the night time row and then mark the night time temperature on each thermometer.



Zac says that England must be the hottest country at night time because the line is higher. Do you agree?
