




Y3 Sum1 W3 MATHS Session 1

Extra Challenge

- *'Find how you can divide this shape into:'*
 - *'two equal parts'*
 - *'four equal parts'*
 - *'five equal parts'*
 - *'eight equal parts.'*

'You might find more than one way for each.'

- *'What other number of equal parts can you divide it into?'*

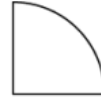




Y3 Sum1 W3 MATHS Session 2

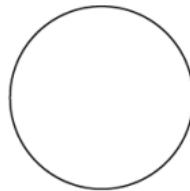
Extra Challenge

'Four children have been given a part of a shape and have been asked to draw the whole shape. Who has drawn a correct shape? Why?'

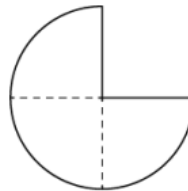


one part of a
whole made out of
three equal parts

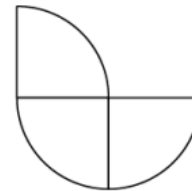
Max



Beth



Ellen



Florent

