



4.10.22

Rounding to the nearest 10



23p



89p



314p



112p



33p



67p



45p



287p

What two items
can you buy for
under £1?

Approximately how
much will your shop cost
if you buy all of the
items?

What two items
can you buy for
under £1?

Approximately how
much will your shop cost
if you buy all of the
items?

What is the most expen-
sive item you can buy
with 70p?

What is the best
lunch you can buy
for £4?



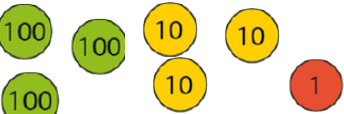
What is the most expen-
sive item you can buy
with 70p?

What is the best
lunch you can buy
for £4?

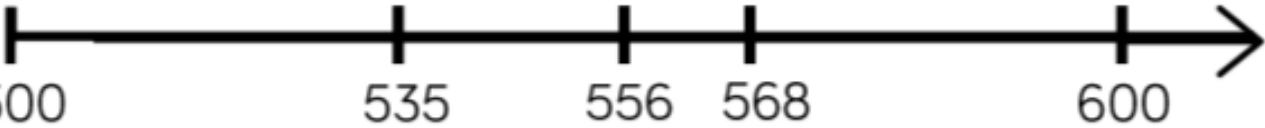


5.10.22

Rounding to the nearest 100

Start number	Rounded to the nearest 100
994	
871	
	
	
	

Say whether each number on the number line is closer to 500 or 600.



535 nearest hundred is _____
556 nearest hundred is _____
600 nearest hundred is _____



5.10.22

CHALLENGE

When a whole number is rounded to the nearest 100, the answer is 200

When the same number is rounded to the nearest 10, the answer is 250

What could the number be?

Is there more than one possibility?



5.10.22

CHALLENGE

When a whole number is rounded to the nearest 100, the answer is 200

When the same number is rounded to the nearest 10, the answer is 250

What could the number be?

Is there more than one possibility?